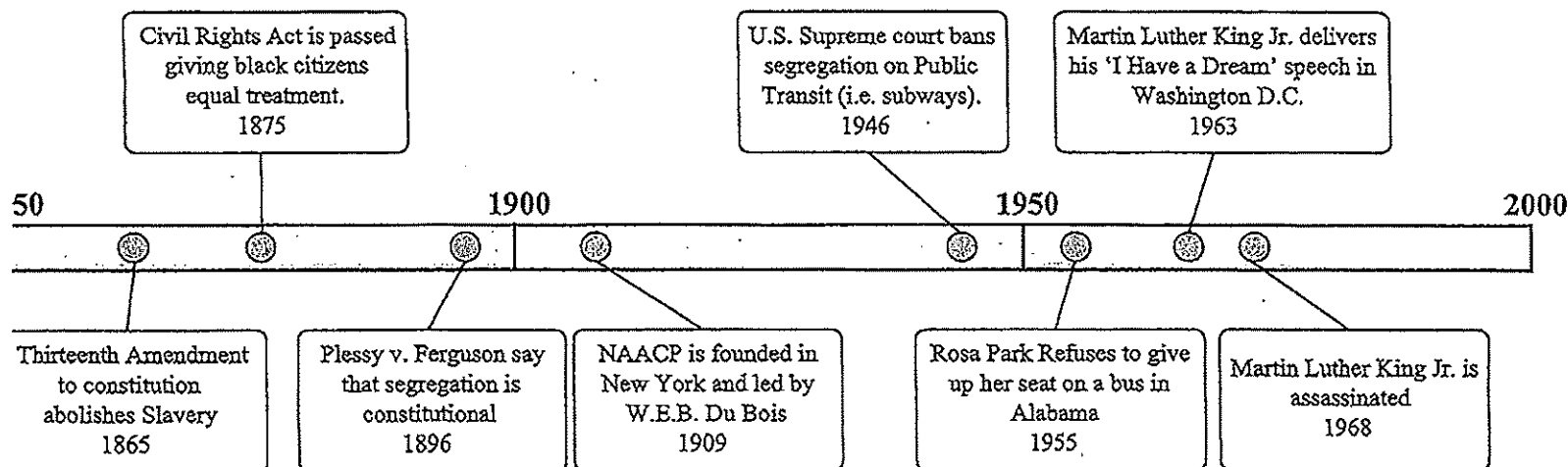


each problem.

The Civil Rights Movement



Answers

1. _____
2. _____
3. _____
4. _____
5. _____
6. _____
7. _____
8. _____
9. Use Line
10. Use Line

Which happened earlier? A. Rosa Parks refuses to give up her seat or B. Martin Luther King Jr. gives his speech _____

How many years after slavery was abolished was the civil rights act passed? _____

What year was the NAACP founded? _____

What year was segregation banned on Public Transits? _____

What is the span (number of years shown) of this timeline? _____

What year was segregation made constitutional? _____

What year was the Civil Rights Act passed? _____

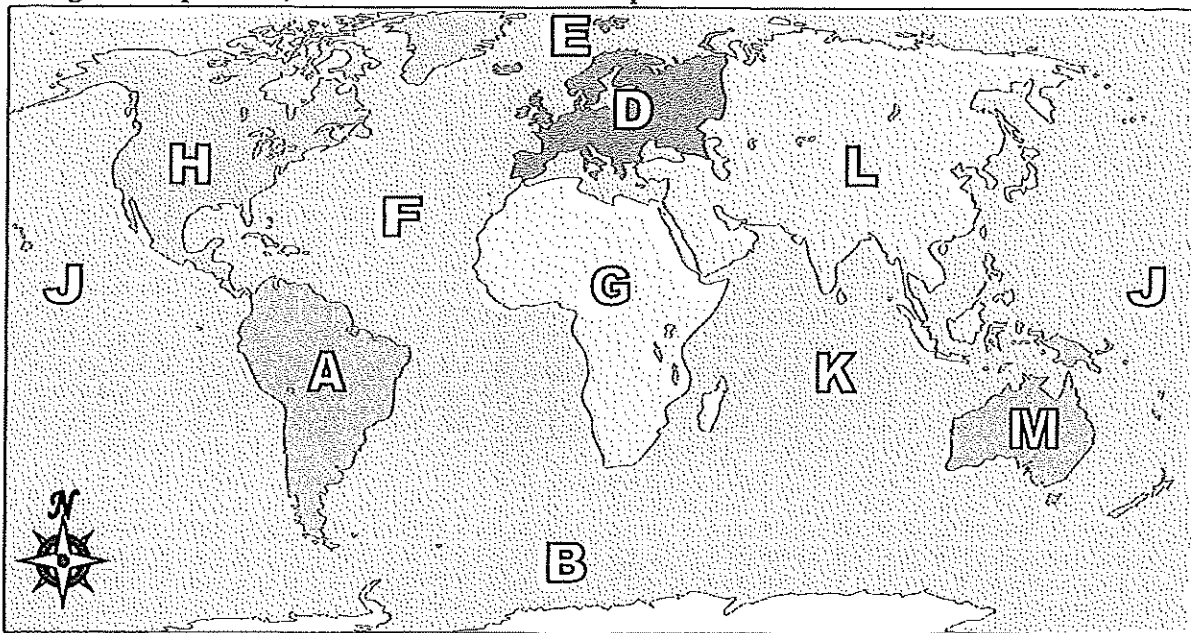
Barack Obama was elected president in 2008. Could this event be shown on this timeline? (Yes / No)

What event happened in 1968? _____

Who delivered the speech 'I have a Dream'? _____



Using the map below, determine which letter represents each continent or ocean.

**Answers**

- 1) North America _____
- 2) Africa _____
- 3) Australia _____
- 4) Europe _____
- 5) Atlantic Ocean _____
- 6) Asia _____
- 7) Indian Ocean _____
- 8) Antarctica _____
- 9) South America _____
- 10) Southern Ocean _____
- 11) Pacific Ocean _____
- 12) Arctic Ocean _____
- 13) If you were in South America and flew east to Australia which continent would you fly over?
A. Antarctica B. Asia C. Africa D. North America
- 14) If you were in Europe and went south which continent would you end up in?
A. Africa B. South America C. North America D. Australia
- 15) Which continent is not touching any other continents?
A. Antarctica B. Europe C. Africa D. Asia
- 16) Which ocean touches South America's western border?
A. Arctic Ocean B. Pacific Ocean C. Indian Ocean D. Atlantic Ocean
- 17) Which of these oceans is not touching North America?
A. Indian Ocean B. Pacific Ocean C. Arctic Ocean D. Atlantic Ocean

1. _____
2. _____
3. _____
4. _____
5. _____
6. _____
7. _____
8. _____
9. _____
10. _____
11. _____
12. _____
13. _____
14. _____
15. _____
16. _____
17. _____

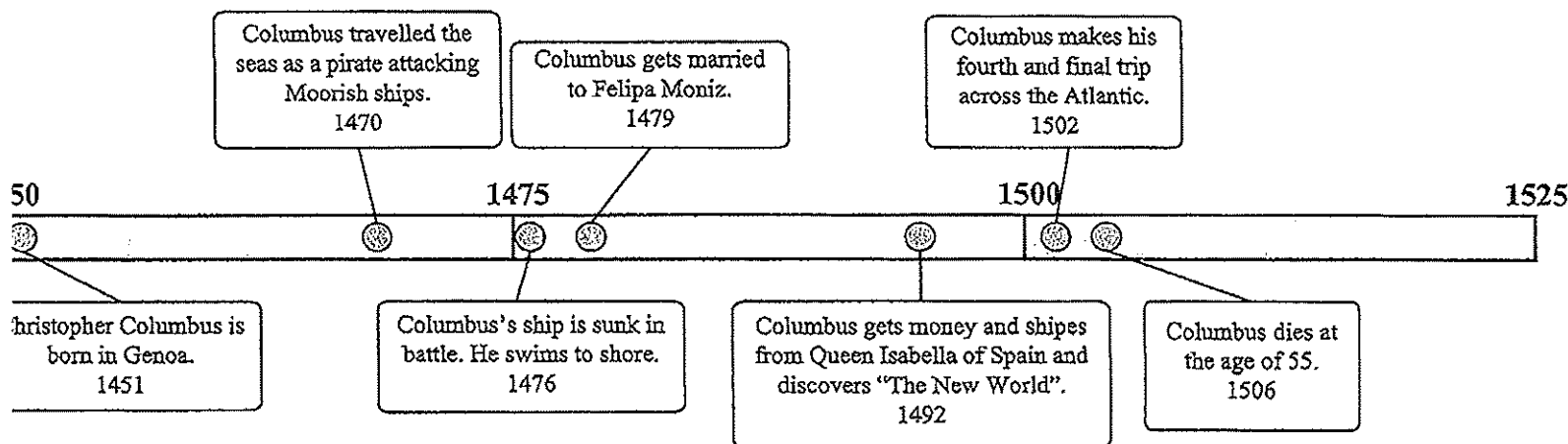
SS Day 3

Reading A Timeline

Name: _____

e each problem.

Voyages of Columbus



Which happened earlier? A. Columbus discovered America or B. Columbus gets married _____

How many years after Columbus was a pirate did his ship sink? _____

What year did Columbus discover 'The New World'? _____

What year did Columbus make his last trip across the Atlantic Ocean? _____

What is the span (number of years shown) of this timeline? _____

What year did Columbus get married? _____

What year was Columbus born? _____

Columbus made his second trip across the ocean in 1493. Could you put this event on the timeline above? (Yes / No)

What is this timeline about? _____

Who gave Columbus money and ships? _____

Answers

- _____
- _____
- _____
- _____
- _____
- _____
- _____
- _____
- Use Line
- Use Line

SS Day 4 and 5 Identifying State Capitals

Name: _____

Write each problem.

1. Baton Rouge	N. Lansing	AA. Pierre	NN. Denver
2. Columbia	O. Atlanta	BB. Topeka	OO. Sacramento
3. Montpelier	P. Jefferson City	CC. Helena	PP. Salem
4. Boston	Q. Jackson	DD. Juneau	QQ. Honolulu
5. Augusta	R. Tallahassee	EE. Boise	RR. Phoenix
6. Nashville	S. St. Paul	FF. Charleston	SS. Albany
7. Oklahoma City	T. Bismarck	GG. Montgomery	TT. Hartford
8. Concord	U. Carson City	HH. Richmond	UU. Austin
9. Springfield	V. Salt Lake City	II. Madison	VV. Frankfort
10. Little Rock	W. Annapolis	JJ. Olympia	WW. Des Moines
11. Cheyenne	X. Raleigh	KK. Harrisburg	XX. Providence
12. Indianapolis	Y. Columbus	LL. Lincoln	
13. Dover	Z. Trenton	MM. Santa Fe	

Answers

1.	_____	26.	_____
2.	_____	27.	_____
3.	_____	28.	_____
4.	_____	29.	_____
5.	_____	30.	_____
6.	_____	31.	_____
7.	_____	32.	_____
8.	_____	33.	_____
9.	_____	34.	_____
10.	_____	35.	_____
11.	_____	36.	_____
12.	_____	37.	_____
13.	_____	38.	_____
14.	_____	39.	_____
15.	_____	40.	_____
16.	_____	41.	_____
17.	_____	42.	_____
18.	_____	43.	_____
19.	_____	44.	_____
20.	_____	45.	_____
21.	_____	46.	_____
22.	_____	47.	_____
23.	_____	48.	_____
24.	_____	49.	_____
25.	_____	50.	_____

_____ Alabama	18) _____ Louisiana	35) _____ Ohio
_____ Alaska	19) _____ Maine	36) _____ Oklahoma
_____ Arizona	20) _____ Maryland	37) _____ Oregon
_____ Arkansas	21) _____ Massachusetts	38) _____ Pennsylvania
_____ California	22) _____ Michigan	39) _____ Rhode Island
_____ Colorado	23) _____ Minnesota	40) _____ South Carolina
_____ Connecticut	24) _____ Mississippi	41) _____ South Dakota
_____ Delaware	25) _____ Missouri	42) _____ Tennessee
_____ Florida	26) _____ Montana	43) _____ Texas
_____ Georgia	27) _____ Nebraska	44) _____ Utah
_____ Hawaii	28) _____ Nevada	45) _____ Vermont
_____ Idaho	29) _____ New Hampshire	46) _____ Virginia
_____ Illinois	30) _____ New Jersey	47) _____ Washington
_____ Indiana	31) _____ New Mexico	48) _____ West Virginia
_____ Iowa	32) _____ New York	49) _____ Wisconsin
_____ Kansas	33) _____ North Carolina	50) _____ Wyoming
_____ Kentucky	34) _____ North Dakota	